

Grade 4 Social Studies

Week of Sept 28- Oct 2

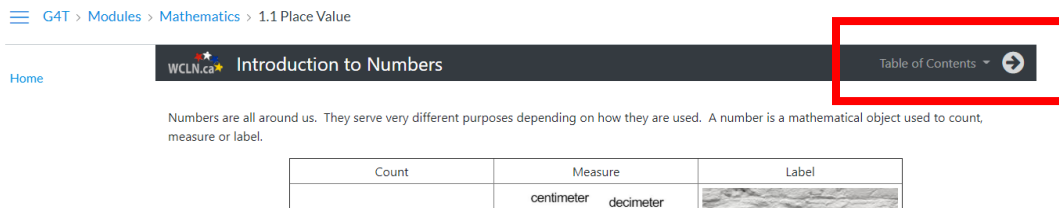
Curricular Area: Physiographic Features and Natural Resources

Lesson Materials


- [Map Skills - What is on a Map?](#)
- [Map of Canada Activity \(This PDF\)](#)

Use the links above to open the lesson for the week. On the lesson webpage, use the arrow next to the “Table of Contents” at the **top of the page** to move through the lessons. You can also click on the Table of Contents to open the menu so you can jump to a specific lesson page.

Do not use the “Next” and “Previous” buttons at the bottom of the Lesson page as this will open a different lesson set.



The screenshot shows a lesson page for 'Introduction to Numbers' on the WCLN.ca website. The breadcrumb trail at the top reads 'G4T > Modules > Mathematics > 1.1 Place Value'. The page title is 'Introduction to Numbers'. A 'Table of Contents' button with a right-pointing arrow is highlighted with a red box. Below the title, there is a paragraph: 'Numbers are all around us. They serve very different purposes depending on how they are used. A number is a mathematical object used to count, measure or label.' Below this paragraph is a table with three columns: 'Count', 'Measure', and 'Label'. The 'Count' column contains a dash '-', the 'Measure' column contains 'centimeter' and 'decimeter', and the 'Label' column contains a small image of a landscape.

Count	Measure	Label
-	centimeter decimeter	

Work through the Online lesson and complete the activities in this Learning Guide. You can print the Learning Guide, or, copy your answers onto a separate piece of paper.

Introduction

1. What is a map?

2. Why do we use a map?

Titles and labels

1. A title should tell a reader _____, _____, and _____ about the map.
2. Below write how a title should be written for a map of Candyland (Use your tips and techniques under titles to help).

Orientation

1. What does a compass rose show?
-
2. On the compass rose below (label the cardinal directions **AND** the intermediate directions)



3. Using the picture below answer the following questions with North, East, South, or West.



- a. The house is _____ of the lake.
- b. The tent is _____ of the person.
- c. The trees are _____ of the sailboat.
- d. The lake is _____ of the trees.
- e. The tent is _____ of the cabin.
- f. The fire is _____ of the person.
- g. The boat is _____ of the fire.
- h. The cabin is _____ of the lake.

Symbols

1. Find 10 symbols in your neighborhood, draw them, and label them.

a.

b.

c.

d.

e.

f.

g.

h.

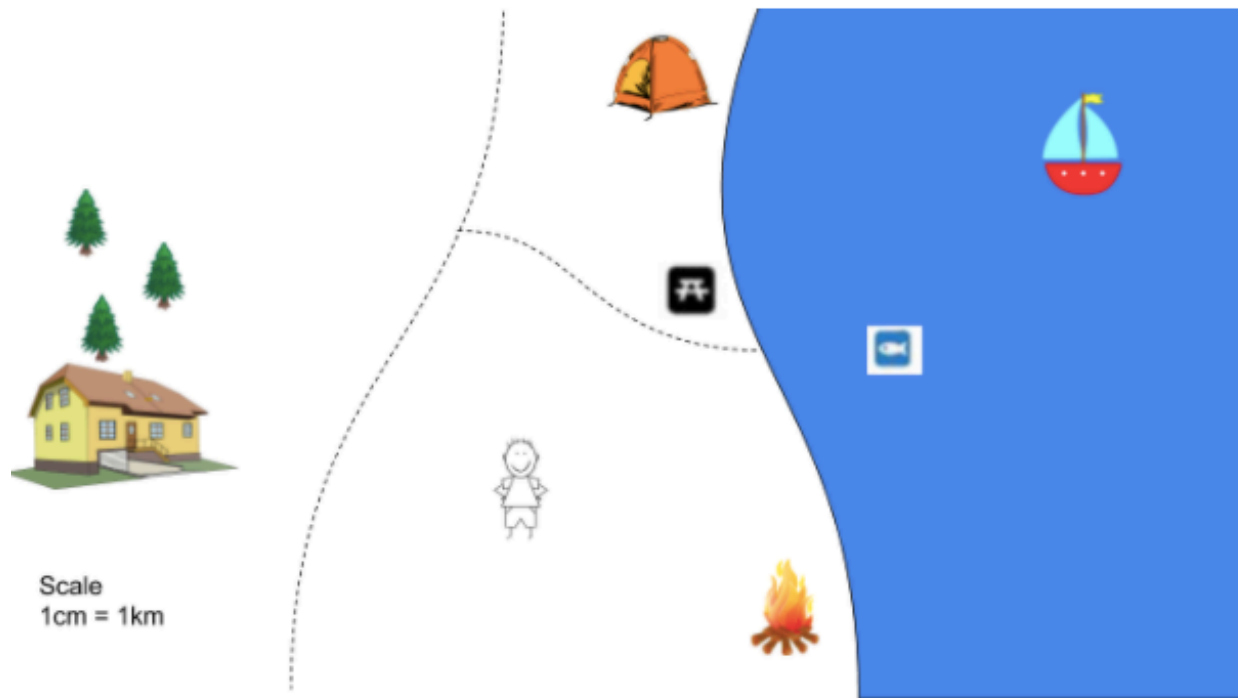
i.

j.

Legends

1. What does a legend on a map do?

2. Create a legend for the following map:
(Legend must include: Picnic area, fishing lake, trees and trail)



Legend

Scales

1. Why is a scale included on a map?

2. Using the picture from the last section, answer the following questions:

a. How far is the house from the lake?

b. How far is the tent from the fire?

c. How far is the boat from the trees?
